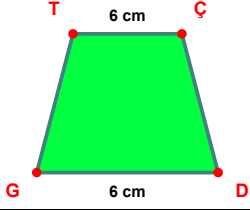
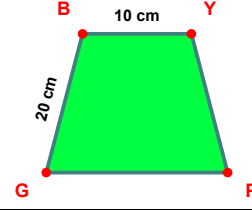


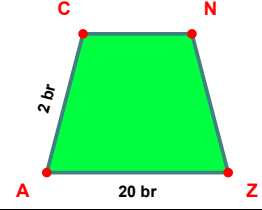
SORU: Aşağıdaki şekillerde verilen, kenar uzunlukları farklarını bulunuz.



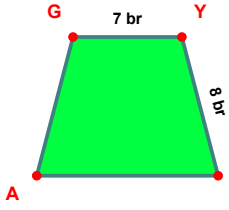
$$|TC| - |DG| = \dots\dots\dots$$



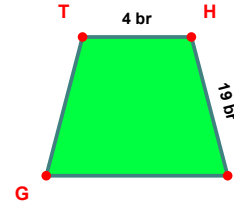
$$|GB| - |BY| = \dots\dots\dots$$



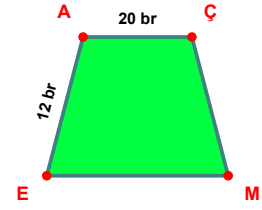
$$|ZA| - |AC| = \dots\dots\dots$$



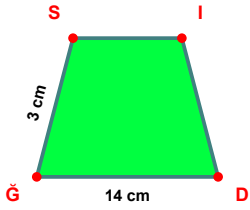
$$|YJ| - |GY| = \dots\dots\dots$$



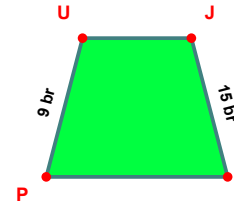
$$|HV| - |TH| = \dots\dots\dots$$



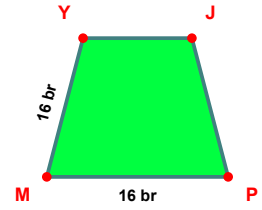
$$|AÇ| - |EA| = \dots\dots\dots$$



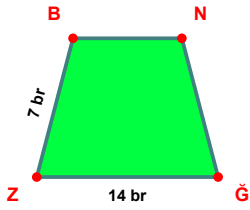
$$|DĞ| - |ĞS| = \dots\dots\dots$$



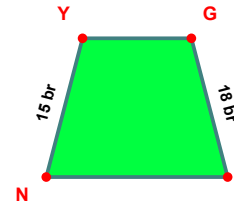
$$|Jİ| - |PU| = \dots\dots\dots$$



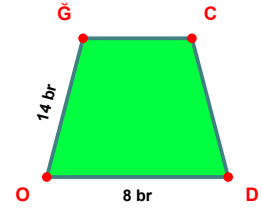
$$|PM| - |MY| = \dots\dots\dots$$



$$|ĞZ| - |ZB| = \dots\dots\dots$$

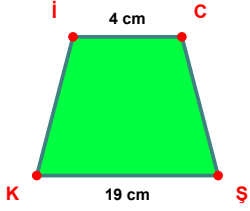


$$|GR| - |NY| = \dots\dots\dots$$

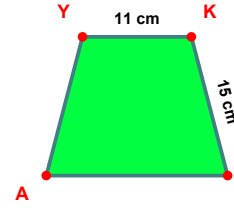


$$|ÖĞ| - |DÖ| = \dots\dots\dots$$

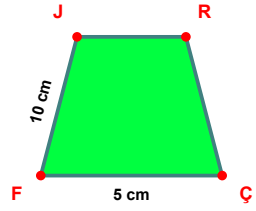
SORU: Aşağıdaki şekillerde verilen, kenar uzunlukları farklarını bulunuz.



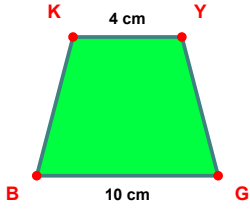
$$|ŞK| - |İC| = \dots\dots\dots$$



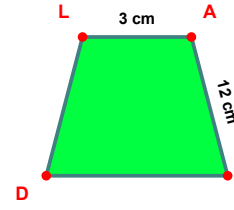
$$|KĞ| - |YK| = \dots\dots\dots$$



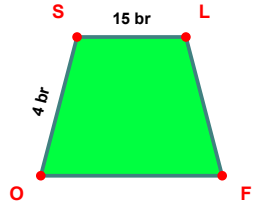
$$|FJ| - |ÇF| = \dots\dots\dots$$



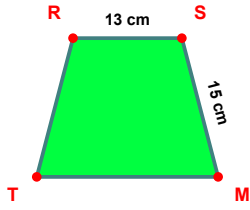
$$|GB| - |KY| = \dots\dots\dots$$



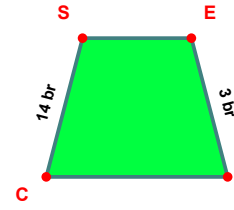
$$|AE| - |LA| = \dots\dots\dots$$



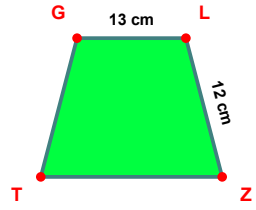
$$|SL| - |OS| = \dots\dots\dots$$



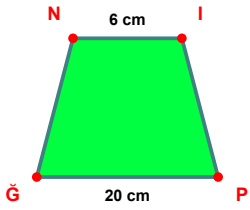
$$|SM| - |RS| = \dots\dots\dots$$



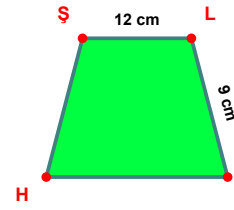
$$|CS| - |EÜ| = \dots\dots\dots$$



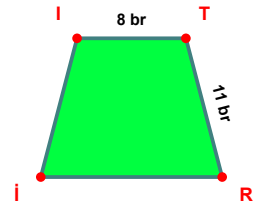
$$|GL| - |LZ| = \dots\dots\dots$$



$$|PĞ| - |Nİ| = \dots\dots\dots$$



$$|ŞL| - |LN| = \dots\dots\dots$$



$$|TR| - |İT| = \dots\dots\dots$$

SÜREÇ ODAKLI DEĞERLENDİRME ÖLÇEĞİ

Doğru Sayısı: / 24

Öğretmen ilgili kutucuğu işaretler.

Geliştirilmeli (0-8)

İyi (9-14)

Çok İyi (15-20)

Mükemmel (21-24)

☐☐☐☐

Hazırlayan:

Bu bölüme sınıfınızın ilgili kazanıma yönelik genel durumuna ilişkin gözlem ve izlenimlerinizi, öğrencilerinizin bu kazanımla ilgili öğrenme eksikliklerini ve bu eksikliklerin giderilmesi amacıyla yaptığınız/yapmayı planladığınız faaliyetleri not edebilirsiniz.

No	Adı - Soyadı	Toplam Puan	Değerlendirme
1			
2			
3			
4			
5			
6			
7			
8			
9			
10			
11			
12			
13			
14			
15			
16			
17			
18			
19			
20			
21			
22			
23			
24			
25			
26			
27			
28			
29			
30			
31			
32			
33			
34			
35			

Hazırlayan: